

MATH SUPERSTARS – 1

Venus, I

Name: _____

(This shows my own thinking.)



1. Sasha needs



She has .

How many more must she get?

Answer: _____ 



2. Five little  flying high.

Seven more come to sit nearby.

How many  in all?

Answer: _____  in all



3. Amanda reads 2 books a week.

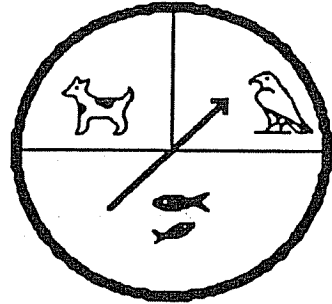
How many books does she read in 6 weeks?

Answer: _____ books






4. Julio will use the spinner to find out what pet his parents will buy. Which pet will he probably get?





Circle the answer.

dog bird fish



5. Make a graph to show the birthdays. Draw a  for each child.

September: 

October: 

November: 

Fall Birthdays

September								
October								
November								



6. Draw the picture that comes next:

