

# MATH SUPERSTARS – 1


Venus, IV

Name: \_\_\_\_\_

(This shows my own thinking.)

- ★★★ 1. Superstar, what number is missing on the star so that the sum is 19?

Answer: \_\_\_\_\_




- ★★★ 2. Look at the cats!

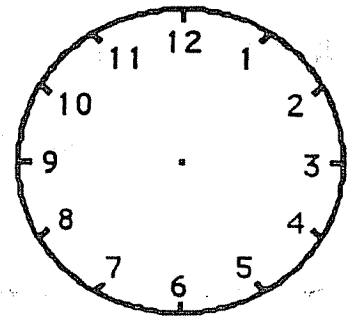
How many tails on all those cats? \_\_\_\_\_

How many ears on all those cats? \_\_\_\_\_


How many legs on all those cats? \_\_\_\_\_



- ★★★ 3. Teaka finishes dinner at 6 o'clock. She reads her book for 2 hours. Then she goes to bed. Draw the hour and minute hands on the clock to show when Teaka goes to bed.




- ★★★ 4. The bug below breaks in half every day. Each half becomes a new bug. If 5 bugs break apart, how many bugs will there be the next day? \_\_\_\_\_



- ★★★ 5. There are 3 children and 1 wagon. Two children can play at a time. One child can ride and one child can pull. In the table, show all the ways the children can ride and pull.



Sam




Kevin

Alice


Child Pulling	Child Riding

- ★★★ 6. Herick ran the ball for 5 yards. Then he ran for 3 more yards. Then he lost 2 yards on a run. His jersey number is 13. How far did he run on those three plays?

Answer: \_\_\_\_\_ yards



- ★★ 7. About how many triangles does it take to cover the big shape? Circle the best estimate.



5 triangles?    10 triangles?    20 triangles?