




- ★★★★ 5. Use the picture graph about a class to answer the questions.




key:  = 2 boys
 = 2 girls

How many people like art best?
 Answer: _____

How many more people like music than reading?
 Answer: _____

How many boys and how many girls are in the class?
 Answer: ____ boys and ____ girls

- ★★ 6. How long is the pencil? Each box is 1 centimeter long.



Answer: _____ centimeters

- ★★ 7. Draw a pencil that is 3 centimeters shorter than the one above:

Draw it here: