

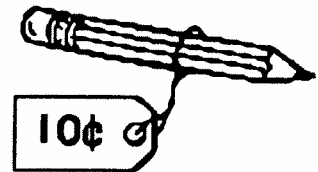
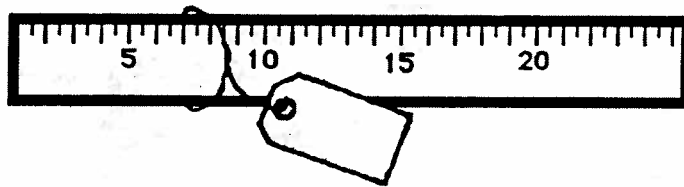
MATH SUPERSTARS – 1

Venus, XX


Name: _____

(This shows my own thinking.)

- ★★★ 1. Jake bought a pencil and a ruler. He spent a quarter and two pennies. How much did the ruler cost? Write the cost on the sales tag.




- ★★★★ 2. Three apples were the same size. Jorge made the 3 apples balance with twelve 1-ounce weights. How much did each apple weigh?



Answer: _____ ounces

- ★★★ 3. Use an inch ruler to measure the pencil.




Answer: _____ inches



4. Pete and his 3 friends are lined up. Use these clues to find Pete's place in line.

- Pete is next to his friend that speaks no evil.
- Pete is not on the end.

Write your answer here: Pete is _____ in line.



5. If you write the numbers 1 through 30, how many times will you write a 3?

Answer: _____ times



6. Use these shapes. Create a picture worth 18¢. Your shapes can be larger or smaller than the ones shown. Draw your picture below:

