

MATH SUPERSTARS – 2

Earth, X

Name: _____

(This shows my own thinking.)

- ★★ 1. Vilma turned 16 years old in 1995. In what year was she born?

Answer: _____

- ★★ 2. Find a number greater than 6,285 and less than 6,582. Use these numbers.

2	5	8	6
---	---	---	---

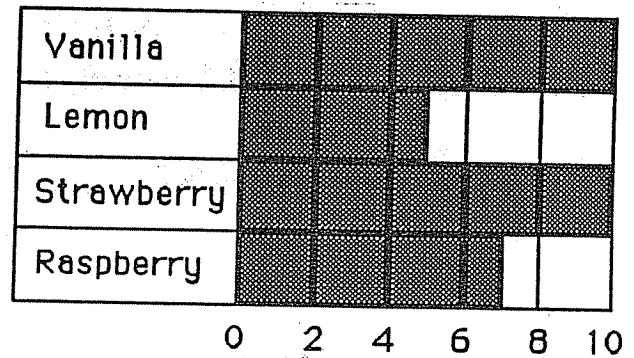
Answer: The number is _____

- ★★ 3. Look at the graph. Answer both questions.

a. How many like raspberry?

b. How many like either lemon or strawberry?

Yogurt Second Graders Like

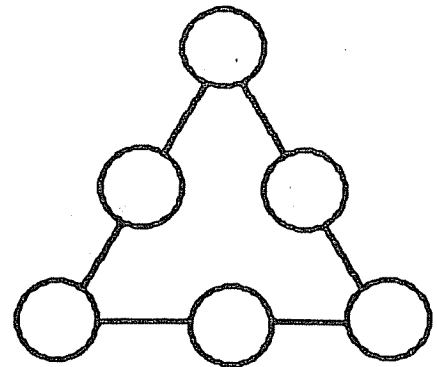


- ★★ 4. I am thinking of two numbers that add to twenty-one. One number is 3 more than the other. What are my numbers?

Answer: _____ and _____

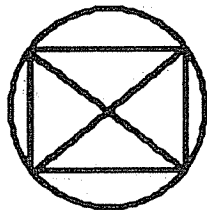


5. Place 1, 2, 3, 4, 5, and 6 in the circles so each side of the triangle has the sum of 11.




6. Which one of these shapes can be drawn without lifting your pencil or going over the same line twice? Circle it.

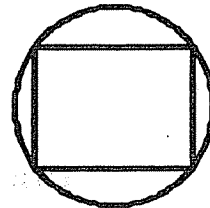
a.



b.

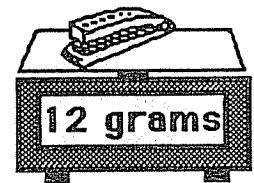
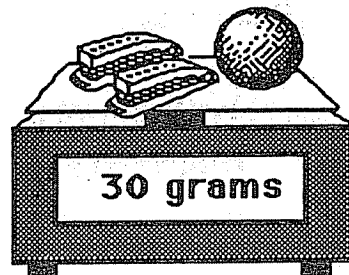


c.



7. How much does the ball weigh?

Answer: ___ grams



8. Henrique pressed the keys $\boxed{5}$, $\boxed{=}$, $\boxed{1}$, $\boxed{8}$, and $\boxed{+}$ on his calculator, but not in that order. He got the answer 23. What problem did he do?

Henrique's Problem:

