

MATH SUPERSTARS - 2

Earth, XVII

Name: _____

(This shows my own thinking.)

- ★ 1. Kamisha is a traveling salesperson. In two months, she traveled *eighty hundred* miles. How many *thousands* of miles did Kamisha travel?

Answer: _____ thousands

- ★★★★ 2. Use a calculator to do each problem below:

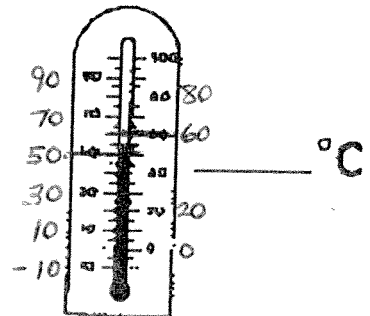
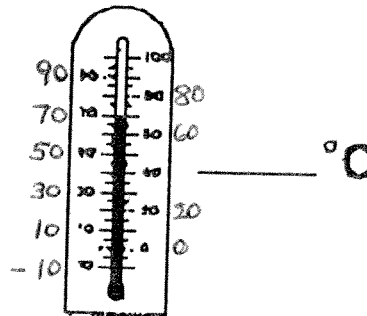
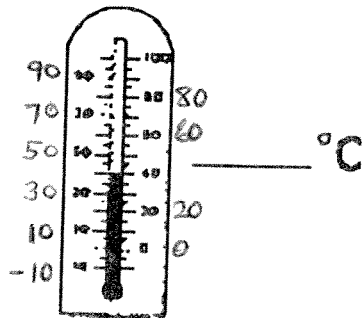
$$25 + 48 + 65 = \underline{\quad\quad} \quad 103 + 22 + 79 = \underline{\quad\quad}$$

$$85 - 38 + 26 = \underline{\quad\quad} \quad 219 + 36 - 95 = \underline{\quad\quad}$$

- ★★ 3. Cindy's mother had four eggs. She bought a dozen more and used up half a dozen making brownies. How many eggs does she have left?

Answer: _____ eggs

- ★★★★ 4. Write the temperature shown on each thermometer. Put your answer on the line beside the thermometer.



- ★★★ 5. Pet's Pleasure is the only dog food Honey will eat. It is sold in packages that contain 6 servings. Honey eats 5 packages a month. How many servings of Pet's Pleasure does she eat?



Answer: _____ servings

- ★★ 6. This table shows bowling scores for four months.

	Sally	Saul	Sal
June	141	189	176
July	187	198	211
Aug.	175	131	185
Sept.	146	165	186

If the scores were rounded to the nearest hundred, during which month would *each* bowler have a 200 average?

Answer: _____

- ★★ 7. I am less than 20 years old. Count by 3's and you say my age. Count by 5's and say my age. How old am I?

Answer: _____

- ★★★ 8. A *doubles fact* means a number is added to itself. $2 + 2 = 4$ and $5 + 5 = 10$ are *doubles facts*. Write the *doubles fact* for each picture below:



