

# MATH SUPERSTARS – 2

Earth, XXI


Name: \_\_\_\_\_

(This shows my own thinking.)

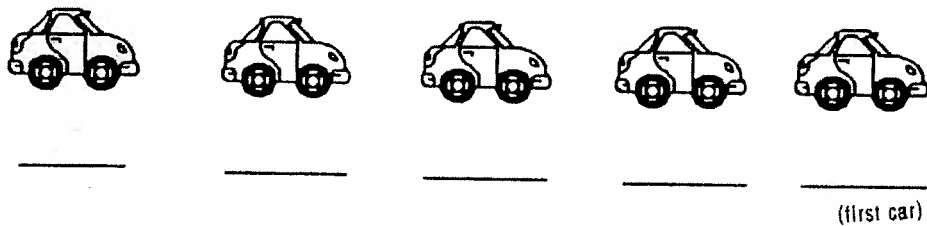
- ★★ 1. A plane left Atlanta to go to Orlando and then Miami. 186 people were on the plane when it left Atlanta. 5 people got off in Orlando but 20 people got on. How many people were on the plane when it got to Miami?

Answer: \_\_\_\_\_ people

- ★★ 2. You have 1 dollar, 1 quarter, and 2 dimes. Circle the most expensive toy you can buy.



- ★★★ 3. Jason lined up 5 toy cars. He placed the blue car between the yellow car and the red car. He put the yellow car last. He placed the purple car behind the green car. Label the color of the cars below as Jason lined them up.



- ★★ 4. Mom had 25 cookies. She ate 2 cookies, Frederick ate 8, Andy ate 6, and Dad ate the rest. How many cookies did Dad eat?

Answer: \_\_\_\_\_ cookies

★★★★ 5. Write the digits in the boxes below so the problems will be correct.

a. 
$$\begin{array}{r} 2 \square \\ + 35 \\ \hline 57 \end{array}$$


b. 
$$\begin{array}{r} \square 7 \\ - 46 \\ \hline 21 \end{array}$$

c. 
$$\begin{array}{r} 73 \\ + 1 \square \\ \hline 92 \end{array}$$

d. 
$$\begin{array}{r} 56 \\ - \square 9 \\ \hline 2 \square \end{array}$$

★★★ 6. How many squares are in this picture?

Answer: \_\_\_\_\_ squares



★★ 7. I am a capital letter made of 3 line segments. Two of my segments are equal and parallel. My third segment is shorter and intersects both parallel line segments. What letter am I?

Answer: \_\_\_\_\_

★★ 8. What fraction of this pie has already been eaten?

Answer:  has been eaten.

