

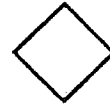
MATH SUPERSTARS - 1

Name: _____

Venus, II

(This shows my own thinking.)

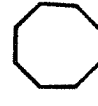
- ★★ 1. Which piece will make this shape if you have several of them?
Circle the answer.



A.

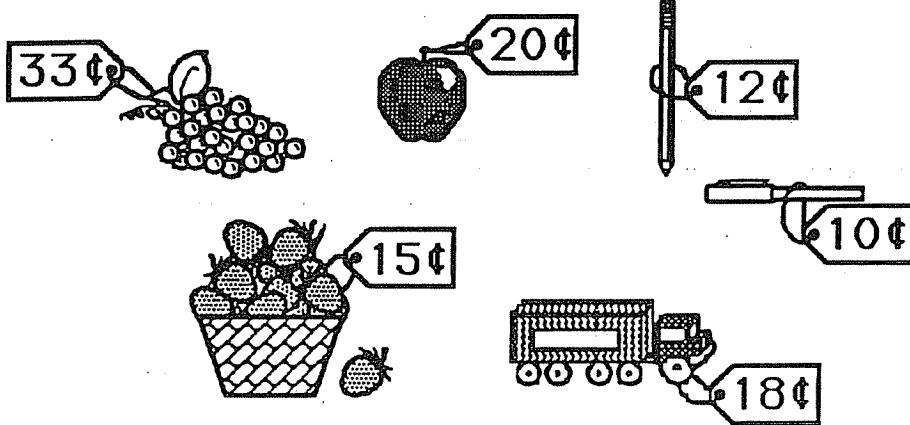


B.



C.

- ★★★★ 2. You spent exactly 33¢. Circle the two things that you bought.



- ★★ 3. Which tile has a different number of dots than the other tiles? Circle the one that is different.

